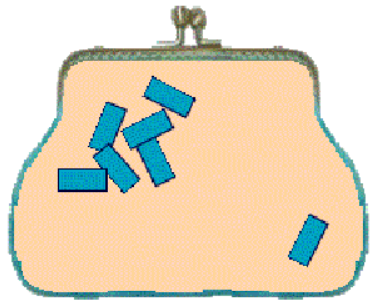
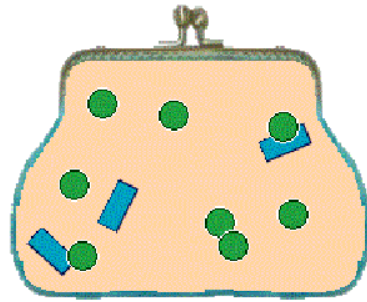


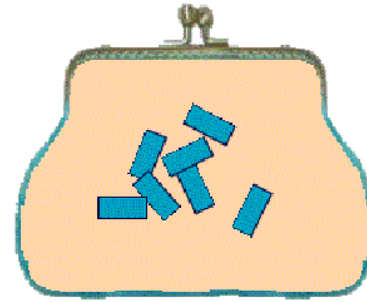
4. pénztárcás feladat



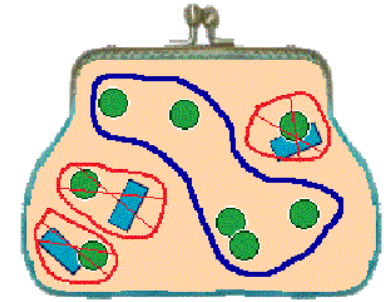
--	--	--	--	--	--	--	--	--	--	--	--	--	--	--	--	--	--	--	--



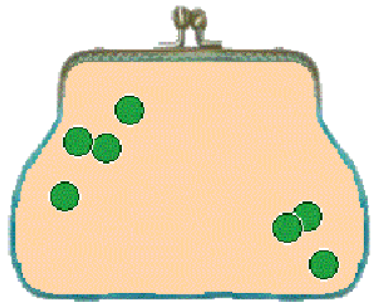
4. pénztárcás feladat megoldása



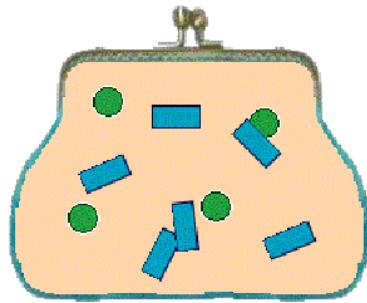
-	6	-	1	=	-	7													
---	---	---	---	---	---	---	--	--	--	--	--	--	--	--	--	--	--	--	--



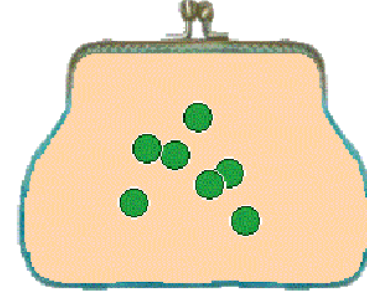
5. pénztárcás feladat



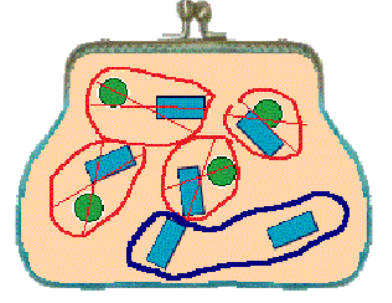
--	--	--	--	--	--	--	--	--	--	--	--	--	--	--	--	--	--	--	--



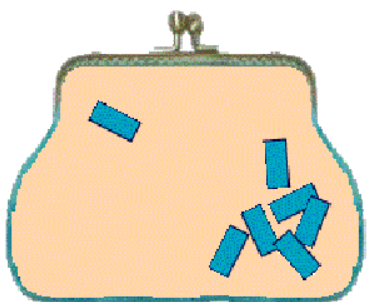
5. pénztárcás feladat megoldása



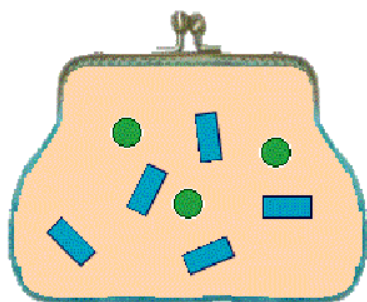
+	4	+	3	=	+	7													
---	---	---	---	---	---	---	--	--	--	--	--	--	--	--	--	--	--	--	--



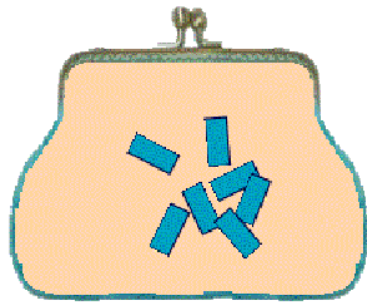
6. pénztárcás feladat



--	--	--	--	--	--	--	--	--	--	--	--	--	--	--	--	--	--	--	--



6. pénztárcás feladat megoldása



-	1	-	6	=	-	7													
---	---	---	---	---	---	---	--	--	--	--	--	--	--	--	--	--	--	--	--

